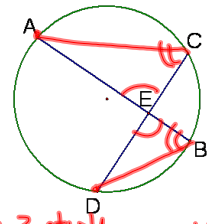


10.6 Find Segment Lengths in Circles

Given: picture
Prove: $AE \cdot EB = CE \cdot DE$

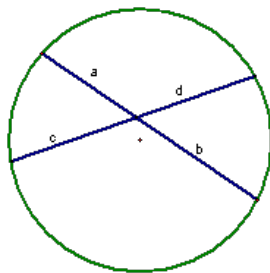


- | S. | R. |
|--|--|
| ① ~ | ① Given |
| ② draw \overline{AC} + \overline{DB} | ② Through any 2 pts there is a line |
| ③ $\angle AEC \cong \angle BED$ | ③ Vert $\angle s \cong$ |
| ④ $\angle C \cong \angle B$ | ④ If 2 inscribed $\angle s$ intercept the same arc, they are \cong |
| ⑤ $\triangle AEC \sim \triangle DEB$ | ⑤ AA~ |
| ⑥ $\frac{AE}{DE} = \frac{CE}{EB}$ | ⑥ Corr sides of $\sim \Delta s$ are proportional |
| ⑦ $AE \cdot EB = CE \cdot DE$ | ⑦ Cross Mult |

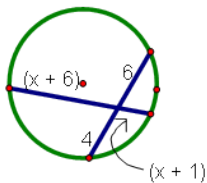
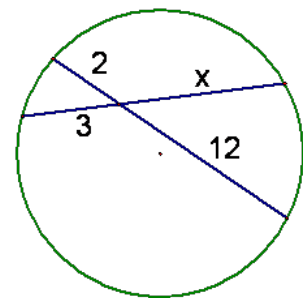
Theorem 10.14-Segments of Chords

Theorem--If 2 chords intersect in a circle, then the products of the lengths of the segments of the chords are equal.

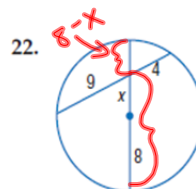
$$a \cdot b = c \cdot d$$



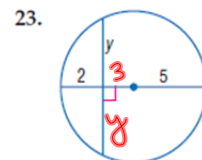
$$\begin{aligned} 3x &= 2 \cdot 12 \\ 3x &= 24 \\ x &= 8 \end{aligned}$$



$$\begin{aligned} (x+6)(x+1) &= 4 \cdot 6 \\ x^2 + 7x + 6 &= 24 \\ x^2 + 7x - 18 &= 0 \\ (x+9)(x-2) &= 0 \\ x &= -9 \quad x = 2 \end{aligned}$$



$$\begin{aligned} 9 \cdot 4 &= (8+x)(8-x) \\ 36 &= 64 - x^2 \\ x^2 &= 28 \\ (2\sqrt{7}) \quad x &= \pm 2\sqrt{7} \end{aligned}$$

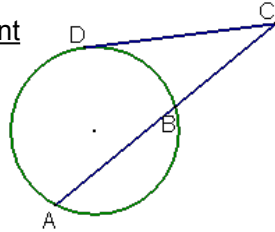


$$\begin{aligned} y^2 &= 2(8) \\ y^2 &= 16 \\ y &= \pm 4 \\ y &= 4 \end{aligned}$$

Secant segment \overline{AC} -- is a segment that contains a chord of a circle and has exactly one endpoint outside the circle.

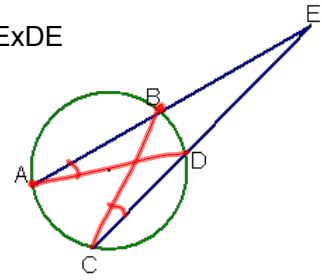
External segment \overline{BC}

Tangent segment \overline{DC}



Given: picture
Prove: $AExBE = CExDE$

$\triangle AED \sim \triangle CEB$

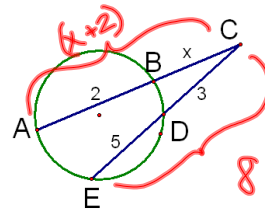
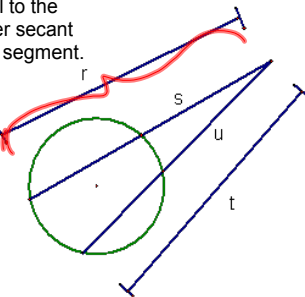


Theorem 10.15-Segments of Secants

Theorem--If two secants share the same exterior point, then the product of the lengths of one secant segment and its external secant segment is equal to the product of the lengths of the other secant segment and its external secant segment.

$$r \cdot s = t \cdot u$$

$$(\text{whole})(\text{ext}) = (\text{whole})(\text{ext})$$



$$8 \cdot 3 = x(x+2)$$

$$0 = x^2 + 2x - 24$$

$$(x+6)(x-4)$$

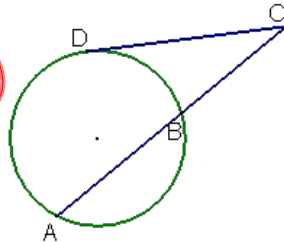
$$x = -6 \quad x = 4$$

Theorem 10.16-Segments of Secants and Tangents Theorem--

If a tangent segment and a secant segment share an exterior point, then the (length of the tangent segment)² = the product of the lengths of the secant segment and its external secant segment

$$\text{tangent}^2 = (\text{whole})(\text{ext})$$

$$DC^2 = AC \cdot BC$$



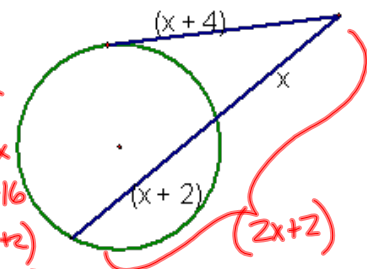
$$(x+4)^2 = (2x+2)x$$

$$x^2 + 8x + 16 = 2x^2 + 2x$$

$$0 = x^2 - 6x - 16$$

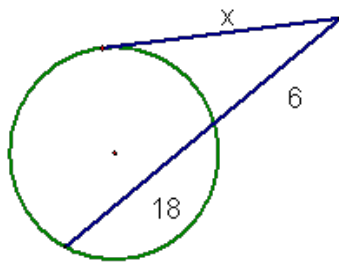
$$= (x-8)(x+2)$$

$$x = 8 \quad x = -2$$



$$x^2 = 24 \cdot 6$$

$$x = 12$$



Homework:

p. 692-694 #s 3-10, 16,

18, ~~26~~